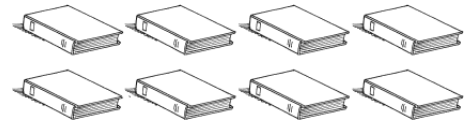


Name _____

1. Each book has 10 pages.
Count by 10s. How many pages
are there in all?



- A** 80
B 40
C 18
D 8
2. Deborah has 18 ice cubes. 10 of the ice cubes melt.
How many ice cubes are left?
- A** 1
B 7
C 8
D 12
3. The pet store has 12 hamsters. They sell 5 hamsters.
How many hamsters are still at the store?


Use the number line to subtract.
Show your work.

$$12 - 5 = \underline{\quad\quad} \quad \underline{\quad\quad} \text{ hamsters}$$



Name _____

1. Rob makes stacks of connecting cubes. Each stack has 10 cubes. How many cubes does Rob have?



- A 20
- B 30
- C 40
- D 50

2. Which equations below are true? Choose all that apply.

- $8 + 4 = 6 + 6$
- $14 - 9 = 5 + 0$
- $12 + 3 = 14 + 1$
- $9 + 1 = 13 - 6$

3. Write a related subtraction and addition fact.

Leah has some stamps. She finds 7 more.

Now Leah has 15 stamps.

How many stamps did Leah have before she found more?

$$\underline{\quad\quad} + \underline{\quad\quad} = \underline{\quad\quad}$$

$$\underline{\quad\quad} - \underline{\quad\quad} = \underline{\quad\quad}$$

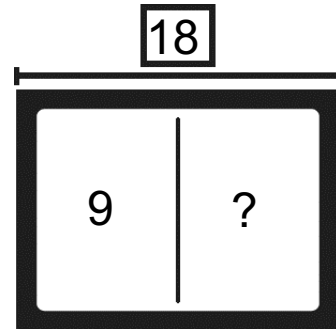
 stamps

Name _____

1. Which related addition fact will help you solve this subtraction fact?

$$18 - 9 = ?$$

- A** $10 + 8 = 18$
B $12 + 5 = 17$
C $9 + 9 = 18$
D $8 + 9 = 17$



2. Jen writes a number to make the equation true. Which number does she write?

$$8 + \underline{\quad} = 7 + 5$$

- A** 2 **C** 4
B 3 **D** 5

3. There are 11 muffins. Hayden eats 2 muffins. How many muffins are left?

_____ muffins

Circle the strategy you used to find the difference.

Count

Make 10

Think Addition

My Way