

1. Luis eats lunch after 10 o'clock and before 2 o'clock every day. Which clocks show the time Luis might each lunch? Choose all that apply.











2. Which clock shows the same time as the clock face?



(A)



(B)




(C)



(D)



3. Write the time that is shown on the clock face.



4. Emma swims for a half hour. How many minutes is this?


- (A) 15      (B) 30      (C) 60      (D) 90

5. Write the numbers to complete the sentence.


When it is time to leave school, the hour hand is between \_\_\_\_ and \_\_\_\_.

A Trip to the Zoo	
Time	Activity
9:30	Leave School
10:00	Zoo Tour
11:30	Lunch
12:30	Movie
2:00	Leave Zoo

6. Draw hands on the clock face to show the time that the movie starts.



7. Do both clocks show the same time? How do you know you are correct?



---

---

---

---

### A Busy Day

Ben has a busy day on Saturday! The chart shows his schedule.

Ben's Schedule	
Time	Activity
8:30	Breakfast
9:30	Soccer
11:00	Shopping
1:30	Lunch
3:30	Basketball
5:00	Birthday Party

1. Show another way to write the time for each activity.


Birthday Party

\_\_\_\_\_

Breakfast


\_\_\_\_\_

2. Draw the hands on the clock to show the time for Lunch.



3. Ben leaves his house 30 minutes before Soccer.

Draw the hands and write the time on the clocks to show what time he leaves his house.



4. Ben goes shopping with his family for 30 minutes.


**Part A**

What time will it be when they finish shopping?  
Choose a way to show the time.

**Part B**

Ben and his family will be back home 30 minutes after they finish shopping.  
What time will it be then?  
Choose a way to show the time.

5. Ben says that this clock shows the same time that Basketball starts.



Do you agree with him?

Circle **Yes** or **No**.

Explain your answer.

---

---

---

---

---

---

---

---

---

---