



加起来等于9


9 的不同组合。



3 和 6




7 和 2




1 和 8

找出组成 8 和 9 的数字。

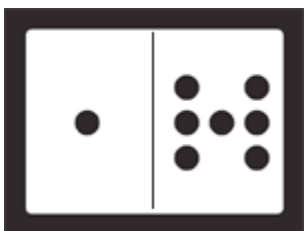
1.



3 和 5




_____ 和 _____

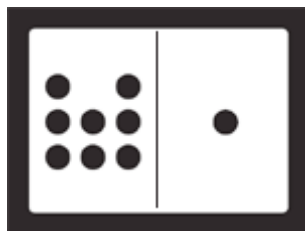


_____ 和 _____


2.



_____ 和 _____



_____ 和 _____



_____ 和 _____